

**M20550 Calculus III Tutorial
Worksheet 6**

1. (*The D-formula*) Find the local maximum and the local minimum value(s) and saddle point(s) of the function $z = x^3 + y^3 - 3xy + 1$.

Solution: First, let's find all the critical points of $z = x^3 + y^3 - 3xy + 1$:

$$\begin{cases} z_x(x, y) = 3x^2 - 3y = 0 \implies y = x^2 & (1) \\ z_y(x, y) = 3y^2 - 3x = 0 & (2) \end{cases}$$

With $y = x^2$, equation (2) becomes $3x^4 - 3x = 0 \implies 3x(x^3 - 1) = 0 \implies x = 0$ or $x = 1$. Thus, all the critical points are $(0, 0)$ and $(1, 1)$.

Now, we will use the Second Derivative Test to test each critical point. We want to compute

$$D(x, y) = \begin{vmatrix} z_{xx} & z_{xy} \\ z_{yx} & z_{yy} \end{vmatrix} = z_{xx}z_{yy} - z_{xy}^2 = (6x)(6y) - (-3)^2 = 36xy - 9.$$

And we have

$$D(0, 0) = -9 < 0 \implies (0, 0) \text{ is a saddle point.}$$

$$D(1, 1) = 36 - 9 > 0 \text{ and } z_{xx}(1, 1) = 6 > 0 \implies z(1, 1) \text{ is a local minimum.}$$

In conclusion, the local minimum value of z is $z(1, 1) = 1^3 + 1^3 - 3(1)(1) + 1 = 0$. And $(0, 0)$ is the saddle point of z , i.e. $z(0, 0)$ is neither a local minimum nor local maximum.

2. Evaluate the double integral $\iint_R (4 - 2y) dA$, for $R = [0, 1] \times [0, 1]$, by identifying it as the volume of a solid.

Solution: Notice that $z = f(x, y) = 4 - 2y \geq 0$ for $0 \leq y \leq 1$. Thus the integral represents the volume of that part of the rectangular solid $[0, 1] \times [0, 1] \times [0, 4]$ which lies below the plane $z = 4 - 2y$. We can compute this by taking the areas of the rectangular part and the triangular part, and multiplying their sum by the "depth" in the x -direction:

$$\iint_R (4 - 2y) dA = \left((1)(2) + \frac{(1)(2)}{2} \right) (1) = 3$$

3. Evaluate the iterated integral.

(a) $\int_0^2 \int_0^\pi r \sin^2 \theta \, d\theta dr$

Solution: Since the region of integration is rectangular and the function is separable in θ and r , we can split it as a product of two integrals

$$\int_0^2 r \, dr \cdot \int_0^\pi \sin^2 \theta \, d\theta = 2 \cdot \int_0^\pi \frac{1}{2}(1 - \cos 2\theta) \, d\theta = \pi$$

(b) $\iint_R ye^{-xy} dA$ on $R = [0, 2] \times [0, 3]$

Solution: Notice that the region is rectangular, so the order of integration doesn't matter. However, we cannot separate this as a product of two integrals, since x and y are mixed variables in the function (we can't write it as a product of two functions $f(x)$ times $g(y)$).

We could try to integrate with respect to y first, but that would require integration by parts. It turns out it is easier to start with x instead:

$$\int_0^3 \int_0^2 ye^{-xy} dx dy = \int_0^3 [-e^{-xy}]_{x=0}^{x=2} dy = \int_0^3 (-e^{-2y} + 1) dy = \frac{1}{2}e^{-6} + \frac{5}{2}$$

4. Find the volume of the solid in the first octant bounded by the cylinder $z = 16 - x^2$ and the plane $y = 5$.

Solution: The cylinder intersects the xy -plane along the line $x = 4$, so in the first octant, the solid lies below the surface $z = 16 - x^2$ and above the rectangle $[0, 4] \times [0, 5]$ in the xy -plane. Then

$$V = \int_0^5 \int_0^4 (16 - x^2) dx dy = \int_0^5 dy \int_0^4 (16 - x^2) dx = 5 \left[16x - \frac{1}{3}x^3 \right]_0^4 = \frac{640}{3}$$

5. (Double integrals over general regions) Evaluate the following integrals:

(a) $\iint_D xy dA$, D is enclosed by the curves $y = x^2$, $y = 3x$;

(b) $\iint_D y dA$, D is bounded by $y = x - 2$, $x = y^2$.

Solution:

(a) Let's find the intersection of the two curves:

$$x^2 = 3x \Leftrightarrow x = 0, x = 3;$$

Since the curves are expressed in terms of x , we see that it's easier to first integrate with respect to y variable. To determine which curve lies above another, one can, for instance, sketch the region.

Let's compute the integral:

$$\begin{aligned} \iint_D xyA &= \int_0^3 dx \int_{x^2}^{3x} xydy = \int_0^3 x \left. \frac{y^2}{2} \right|_{x^2}^{3x} dx = \frac{1}{2} \int_0^3 x(x^4 - 9x^2) dx = \\ &= \frac{1}{2} \int_0^3 x^5 - 9x^3 dx = \frac{1}{2} \left(\left. \frac{x^6}{6} \right|_0^3 - 9 \left. \frac{x^4}{4} \right|_0^3 \right) = \frac{1}{2} \left(\frac{3^6}{6} - 9 \frac{3^4}{4} \right) = \frac{3^6}{4} \left(\frac{1}{3} - \frac{1}{2} \right) = \\ &= -\frac{3^5}{8} = -\frac{243}{8}. \end{aligned}$$

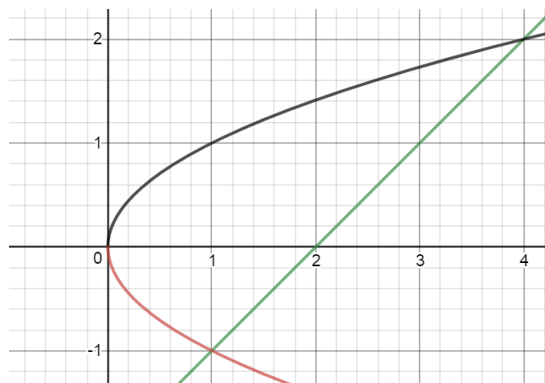
(b) Find the intersection of the curves:

$$y + 2 = y^2 \Leftrightarrow y^2 - y - 2 = 0 \Leftrightarrow y = 2, y = -1.$$

These curves are conveniently expressed as functions of y , so we can take the boundaries of the inner integrals as functions of y and integrate first with respect to x :

$$\begin{aligned} \iint_D ydA &= \int_{-1}^2 dy \int_{y^2}^{y+2} ydx = \int_{-1}^2 y(y+2-y^2)dy = \\ &= \left(\frac{y^3}{3} + y^2 - \frac{y^4}{4} \right) \Big|_{-1}^2 = \left(\frac{8}{3} + 4 - \frac{16}{4} \right) - \left(\frac{-1}{3} + 1 - \frac{1}{4} \right) = \frac{43}{12}. \end{aligned}$$

Remark. To understand which curve is the upper bound and which is the lower, sketch the region over which you integrate. In this case, the region is



6. (Fubini's theorem) Change the order of integration in the following integrals:

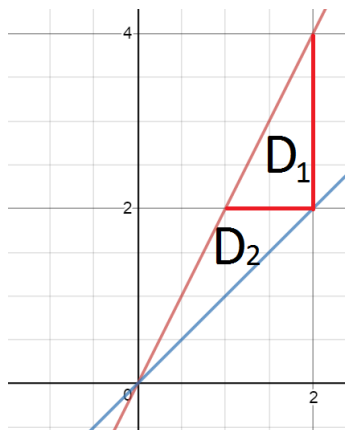
(a) $\int_0^2 dx \int_x^{2x} f(x, y) dy;$

(b) $\int_{-6}^2 dx \int_{\frac{x^2}{4}-1}^{2-x} f(x, y) dy;$

Hint: in the second case you may need to sketch the region and to split the integral into two integrals over smaller regions.

Solution:

(a) Sketch the region:



We see that when we change the order of integration, the upper curve is piecewise. So, we split the region into two parts D_1 and D_2 so that the upper curves are not piecewise (see the remark to the next bullet for an alternative approach). Then

$$\int_0^2 dx \int_x^{2x} f(x, y) dy = \iint_{D_1 \cup D_2} f(x, y) dA = \iint_{D_1} f(x, y) dA + \iint_{D_2} f(x, y) dA.$$

The first integral is

$$\iint_{D_1} f(x, y) dA = \int_2^4 dy \int_{y/2}^{2-y} f(x, y) dx;$$

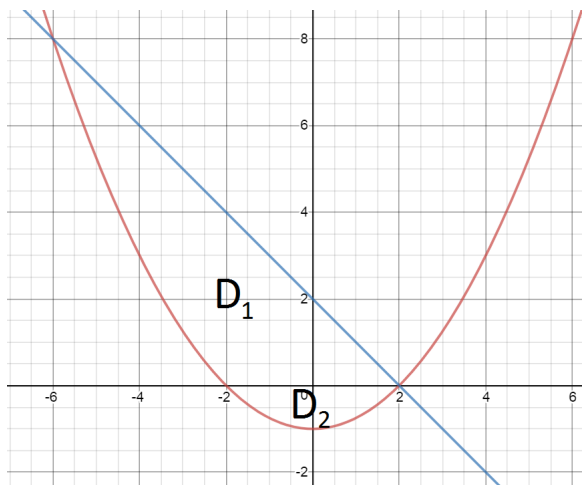
The second integral is

$$\iint_{D_2} f(x, y) dA = \int_0^2 dy \int_{y/2}^y f(x, y) dx.$$

Thus

$$\int_0^2 dx \int_x^{2x} f(x, y) dy = \int_2^4 dy \int_{y/2}^{2-y} f(x, y) dx + \int_0^2 dy \int_{y/2}^y f(x, y) dx.$$

(b) Let's sketch the region:



Where D_1 is the region above x -axis and D_2 is the region below x -axis. Let's write the integral over the whole region $D_1 \cup D_2$ as

$$\iint_{D_1 \cup D_2} f(x, y) dA = \iint_{D_1} f(x, y) dA + \iint_{D_2} f(x, y) dA.$$

If we solve for x in $y = x^2/4 - 1$, then we obtain two branches of the parabola:

$$x = \sqrt{4(y+1)} \quad \text{and} \quad x = -\sqrt{4(y+1)}.$$

Then the integral over D_1 can be written as

$$\iint_{D_1} f(x, y) dA = \int_0^8 dy \int_{-\sqrt{4(y+1)}}^{\sqrt{4(y+1)}} f(x, y) dy,$$

where the number 8 is obtained from plugging into $x^2/4 - 4$ the former lower bound -6 . The inner boundaries of the integral over D_2 are the two branches of the parabola:

$$\iint_{D_2} f(x, y) dA = \int_{-1}^0 dy \int_{-\sqrt{4(y+1)}}^{\sqrt{4(y+1)}} f(x, y) dx.$$

Thus the resulting integral over $D_1 \cup D_2$ is

$$\iint_{D_1 \cup D_2} f(x, y) dA = \int_0^8 dy \int_{-\sqrt{4(y+1)}}^{\sqrt{4(y+1)}} f(x, y) dy + \int_{-1}^0 dy \int_{-\sqrt{4(y+1)}}^{\sqrt{4(y+1)}} f(x, y) dx.$$

Remark. Instead of splitting the region into two parts, we could also define a function

$$g(y) := \begin{cases} y + 2, & y \geq 0, \\ \sqrt{4(y+1)}, & -1 \leq y \leq 0. \end{cases}$$

In other words, we could split the boundary itself. Then the integral could be written as

$$\int_{-6}^2 dx \int_{x^2/4-1}^{2-x} f(x, y) dy = \int_{-1}^8 \int_{-\sqrt{4(y+1)}}^{g(y)} f(x, y) dy.$$

However, if we were given an actual function $f(x, y)$ and were asked to compute the integral, we would have to split the integral again into integrals over the two regions so that $g(y)$ is given by an explicit formula.

7. (Optional: Lagrange multipliers with two constraints) Find the maximum value of the function $f(x, y, z) = x + 2y$ on the curve of intersection of the plane $x + y + z = 1$ and the cylinder $y^2 + z^2 = 4$.

Solution: Basically, the problem asks to maximize f subject to two constraints:

$$g(x, y, z) = x + y + z = 1$$

$$h(x, y, z) = y^2 + z^2 = 4$$

We'll do this problem by the method of Lagrange Multipliers: First compute

$$\nabla f(x, y, z) = \langle 1, 2, 0 \rangle$$

$$\nabla g(x, y, z) = \langle 1, 1, 1 \rangle$$

$$\nabla h(x, y, z) = \langle 0, 2y, 2z \rangle$$

We know $\nabla f = \lambda \nabla g + \mu \nabla h$ for some scalars λ, μ . So, along with the two constraints, we have the following system of equations:

$$\begin{cases} 1 & = \lambda & (1) \\ 2 & = \lambda + 2\mu y & (2) \\ 0 & = \lambda + 2\mu z & (3) \\ x + y + z & = 1 & (4) \\ y^2 + z^2 & = 4 & (5) \end{cases}$$

We get $\lambda = 1$ from equation (1). Putting this into equations (2) and (3), we get

$$\begin{cases} 1 & = 2\mu y \\ -1 & = 2\mu z. \end{cases}$$

Adding these two equations, we get $2\mu y + 2\mu z = 0 \implies 2\mu(y + z) = 0$. So, $\mu = 0$ or $y = -z$.

If $\underline{\mu = 0}$, then from equation (2), we have $2 = 1$, a contradiction. So, $\mu \neq 0$.

If $\underline{y = -z}$, then equation (5) yields $2z^2 = 4 \implies z = \pm\sqrt{2}$. So then $y = \mp\sqrt{2}$. And from equation (4), $x = 1 - y - z$. So, $x = 1 - (-\sqrt{2}) - \sqrt{2} = 1$ or $x = 1 - \sqrt{2} - (-\sqrt{2}) = 1$.

So, we obtain the points $(1, -\sqrt{2}, \sqrt{2})$ and $(1, \sqrt{2}, -\sqrt{2})$.

So then,

$$f(1, -\sqrt{2}, \sqrt{2}) = 1 - 2\sqrt{2}$$

$$f(1, \sqrt{2}, -\sqrt{2}) = 1 + 2\sqrt{2}.$$

Thus, the maximum value of f is $1 + 2\sqrt{2}$ on the curve of intersection.