

Learning Goals: Applications of Taylor Polynomials

- Writing down the abstract formula for the n th Taylor Polynomial of $F(x)$ at a .
- Using $T_n(x)$ to estimate function values.
- familiarity with the general principle that you can increase accuracy of the approximation by increasing n or decreasing the size of the interval (as long as the Taylor series converges to the function).
- Using Taylor's inequality to find upper bounds for the error when we approximate $f(x)$ by $T_n(x)$ on an interval.
- Using Taylor's inequality to choose an interval where an approximation by $T_n(x)$ for a fixed value of n has an error less than some given bound.
- Using Taylor's inequality to choose a value of n that keeps the error of estimation below a given bound on a fixed interval.

Applications of Taylor Polynomials: Stewart Section 11.11

We have seen many applications of Taylor series and in this section we want to look more carefully at those applications where we estimate the values of a function with a Taylor polynomial.

Recall that we used the linear approximation of a function in Calculus 1 to estimate the values of the function near a point a (assuming f was differentiable at a):

$$f(x) \approx f(a) + f'(a)(x - a) \quad \text{for } x \text{ near } a.$$

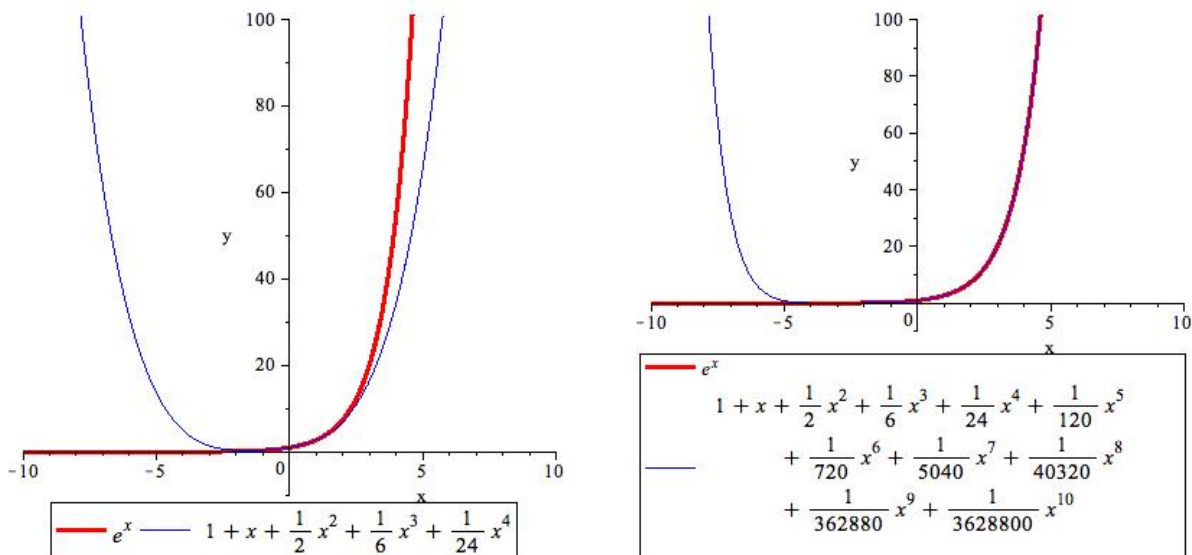
Now suppose that $f(x)$ has infinitely many derivatives at a and $f(x)$ equals the sum of its Taylor series in an interval around a , then we can approximate the values of the function $f(x)$ near a by the first few terms of the Taylor series at x , or the n th Taylor Polynomial for some n :

$$f(x) \approx T_n(x) = f(a) + \frac{f'(a)}{1!}(x - a) + \frac{f^{(2)}(a)}{2!}(x - a)^2 + \frac{f^{(3)}(a)}{3!}(x - a)^3 + \cdots + \frac{f^{(n)}(a)}{n!}(x - a)^n.$$

Note that $T_n(x)$ is a polynomial of degree n with the property that $T_n(a) = f(a)$ and $T_n^{(i)}(a) = f^{(i)}(a)$ for $i = 1, 2, \dots, n$.

Note also that $T_1(x)$ is the linear approximation given above. We would expect that as n increases, the level of accuracy of the approximation will also increase. This is indeed the case when the Taylor series at a converges to $f(x)$ at values of x near a .

Example For example, we could estimate the values of $f(x) = e^x$ on the interval $-4 < x < 4$, by either the fourth degree Taylor polynomial at 0 or the tenth degree Taylor. The graphs of both are shown below.



Example (a) Find the Taylor polynomial of order three of the function $f(x) = \sin x$ at $a = \frac{\pi}{2}$?

(b) Use the Taylor Polynomial of degree three to estimate $\sin(\frac{49\pi}{100})$.

Example (i) Write out the general formula for the fourth degree Taylor Polynomial of a function $f(x)$ at a .

(ii) The following is the fourth order Taylor polynomial of a function $f(x)$ at $a = 3$.

$$2 + \sqrt{3}(x - 3) + 10(x - 3)^2 + \pi(x - 3)^3 + 3(x - 3)^4$$

What is $f^{(2)}(3)$?

If $f(x)$ equals the sum of its Taylor series (about a) at x , then we have

$$\lim_{n \rightarrow \infty} T_n(x) = f(x)$$

and **larger values of n should give of better approximations to $f(x)$** . As with linear approximation (approximating with $T_1(x)$), the further the value of x is from a , the weaker our approximation with $T_n(x)$ will be for any fixed value of n as is evident from the graphs above. We have the tools we need to help up pick the optimal value of n and/or the optimal interval of approximation to keep our error of approximation at the desired levels. We will work through several examples below.

We can use Taylor's Inequality to help estimate the error in our approximation.

The error in our approximation of $f(x)$ by $T_n(x)$ is $|R_n(x)| = |f(x) - T_n(x)|$. We can estimate the size of this error in two ways:

1. Taylor's Inequality If $|f^{(n+1)}(x)| \leq M$ for $|x - a| \leq d$ then the remainder $R_n(x)$ of the Taylor Series satisfies the inequality

$$|R_n(x)| \leq \frac{M}{(n+1)!} |x - a|^{n+1} \quad \text{for } |x - a| \leq d.$$

2. If the Taylor series is an alternating series, we **can use the alternating series estimate for the error**.

Example (a) Find the fourth degree Taylor polynomial of $f(x) = e^x$ at $a = 0$ (the McLaurin Polynomial of degree 4).

(b) What is the function $f^{(5)}(x)$?

Is $f^{(5)}(x)$ increasing or decreasing on the interval $-4 \leq x \leq 4$?

Can you find an upper bound for $f^{(5)}(x)$ on the interval $-4 \leq x \leq 4$?

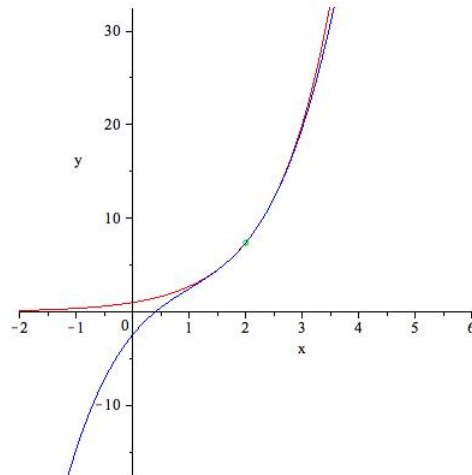
(c) Use Taylor's inequality and the bound found in part (b) to determine the accuracy of the approx-

imation to $f(x)$ by $T_4(x)$ on the interval $-4 \leq x \leq 4$? (Give an upper bound for the error on this interval).

Note: the graph of this polynomial and the function $f(x) = e^x$ appear in one of the pictures above.

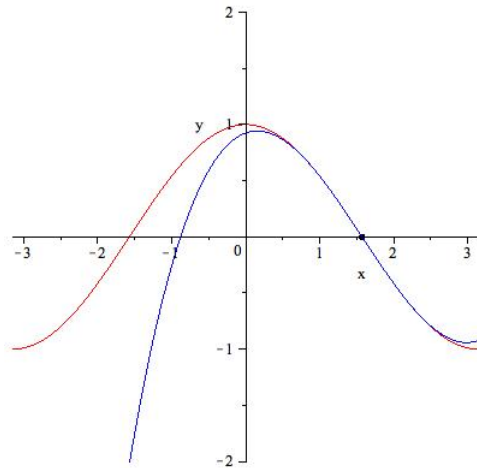
(d) Find an interval around 0 for which this approximation has an error less than .001.

Example (a) Find the third Taylor polynomial of $f(x) = e^x$ at $a = 2$ (the polynomial and the function are graphed below near 0).



(b) Use Taylor's Inequality to give an upper bound for the error possible in using this approximation to e^x for $1 < x < 3$.

Example (a) Find the third Taylor polynomial of $g(x) = \cos x$ at $a = \frac{\pi}{2}$.



(b) Use the fact that the Taylor series is an alternating series to determine the maximum error possible in using this approximation to $\cos x$ for $\frac{\pi}{4} \leq x \leq \frac{3\pi}{4}$?

(c) Find a Taylor polynomial for $\cos(x)$ at $a = \frac{\pi}{2}$ for which the maximum error of estimation possible on the interval $\frac{\pi}{4} \leq x \leq \frac{3\pi}{4}$ is less than 10^6 . You may use your calculator if necessary.

Example Determine for which x the approximation of $\sin x$ by its 3rd degree MacLaurin polynomial $T_3(x)$ (Taylor polynomial centered at 0) is accurate to within $\frac{1}{3840}$, by using the Alternating Series Remainder Estimation Theorem.

Note: $3840 = 120 \cdot 2^5$.

- $-\frac{1}{2} < x < \frac{1}{2}$
- $-1 < x < 1$
- $-\sqrt{32} < x < \sqrt{32}$
- $-\sqrt[5]{120} < x < \sqrt[5]{120}$
- $-120 < x < 120$

Extras

Einstein's Theory of Special Relativity The mass of an object moving with velocity ν is

$$m = \frac{m_0}{\sqrt{1 - \frac{\nu^2}{c^2}}} = \left(1 - \frac{\nu^2}{c^2}\right)^{-\frac{1}{2}}$$

where m_0 is the mass of the object when at rest and c is the speed of light. The kinetic energy of the object is the difference between its total energy and its energy at rest:

$$K = mc^2 - m_0c^2$$

(a) Show that

$$K = m_0c^2 \left[\left(1 - \frac{\nu^2}{c^2}\right)^{-1/2} - 1 \right].$$

(b) Use your knowledge of the binomial series to find the Taylor series at 0 for $(1 + x)^{-1/2}$ when $-1 < x < 1$.

(c) Use the above Taylor series with $x = \frac{-\nu^2}{c^2}$ to find a power series expression for K .

(d) Show that when ν is very small compared with c , the expression for K agrees with classical Newtonian physics:

$$K = \frac{1}{2}m_0\nu^2.$$

(e) We wish to find an upper bound for the **the difference between the two expressions for K**

$$|R| = \left| m_0c^2 \left[\left(1 - \frac{\nu^2}{c^2}\right)^{-1/2} - 1 \right] - \frac{m_0\nu^2}{2} \right| = \left| m_0c^2 \left(\frac{3\nu^4}{8c^4} + \frac{5\nu^6}{16c^6} + \dots \right) \right|,$$

when $|\nu| \leq 100$ m/s.

We use Taylor's theorem for the remainder:

(i) If $f(x) = m_0c^2 \left[(1 + x)^{-1/2} - 1 \right]$, find $f''(x)$.

(ii) Substituting $x = -\frac{\nu^2}{c^2}$, find the maximum value M of $f''(x)$ on the interval $|\nu| \leq 100$ m/s.

(iii) Using Taylor's Inequality

$$|R| \leq \frac{M}{2!} x^2$$

along with the approximation $c = 3 \times 10^8$ m/s to show that

$$|R| < (4.2 \times 10^{-10})m_0 \text{ when } |\nu| \leq 100 \text{ m/s.}$$