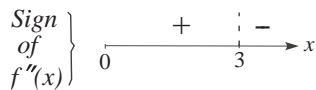
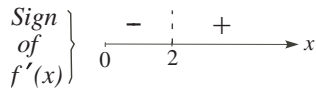


Math 10250 Review for Exam 3

- Find all critical points of the function $f(x) = x^3 e^{-2x}$. Determine if each is a local maximum or local minimum and whether or not it is a global maximum or minimum
Ans: Global max at $x = 1.5$. No global min
- Find all critical points of the function $f(x) = 3x \ln x$, $x > 0$. Where is the function increasing and where is it decreasing? Use the second derivative to describe the concavity of the function.
Ans: Decreasing on $(0, 1/e)$, increasing on $(1/e, \infty)$, concave up.
- Find where the **slope** of the function $f(x) = x^3 + 3x^2 - 9x + 17$ is (a) increasing and (b) decreasing. Also, sketch its graph.
Ans: (a) $(-1, \infty)$; concave up and (b) $(-\infty, -1)$; concave down
- Sketch a graph of the function $f(x) = \frac{2x}{x-3}$. List all vertical and horizontal asymptotes, and describe where the graph is increasing, decreasing, concave up, and concave down.
Ans: Vertical asym. $x = 3$; Horizontal asym. at $y = 2$ and the function is decreasing everywhere.
- Sketch the graph of a function $f(x)$ defined for $x > 0$ and such that: $\lim_{x \rightarrow 0^+} f(x) = \infty$, $\lim_{x \rightarrow \infty} f(x) = 4$, and



- Use implicit differentiation to find $\frac{dy}{dx}$ when $y^4 - ye^{5x} = 14$.
Ans: $\frac{dy}{dx} = \frac{5ye^{5x}}{4y^3 - e^{5x}}$
- Find the equation of the tangent line to the curve $x^2 - xy^2 = e^y$ at the point $(1, 0)$.
(Ans: $y = 2(x - 1)$)
- The graph of the **derivative** of $f(x)$ is shown in Figure 1. (a) Find all critical points of $f(x)$, (b) Where is $f(x)$ increasing? decreasing? (c) Where is $f(x)$ concave up? concave down? (d) Give all inflection points.
(a) $x = -1, 4$ (b) increasing $(-1, 4)$; decreasing $(-\infty, -1)$ and $(4, \infty)$ (c) concave up $(-\infty, 2)$; concave down $(2, \infty)$ (d) $x = 2$

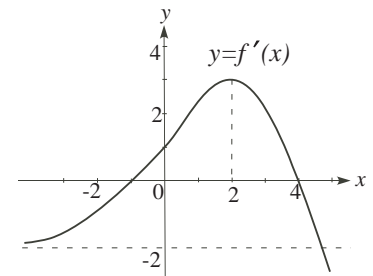


Figure 1

- If $f(x)$ satisfies the equation $f'(x) = \ln x$, $x > 0$, then find the concavity of its graph.
Ans: Concave up
- Suppose the demand function for a certain product is given by the equation $q = 10,125 - 150p^{\frac{3}{2}}$, $0 \leq p \leq 25$, where p is the price per unit and q is the number of items sold. What price maximizes revenue?
Ans: $p = 9$
- Find the global maximum and minimum value, if any, of the function $f(x) = 3x^4 - 8x^3 + 5$ on $[1, \infty)$
Ans: Global min = -11 occurring at $x = 2$ and global max none.
- A farmer wants to fence an area of 1.5 million square feet in a rectangular field and then divide it in half with a fence parallel to one of the sides of the rectangle. How can she do this so as to minimize the cost of the fence?
Ans: 1.5 by 1
- A circular cylindrical can, open at one end, has external surface area 27π cm². Find the maximum volume of such a can.
Ans: 27π cm³

14. A box with a square base and a top is to be built with a volume of 20 cubic feet. The material for the base has density 3 lb per square foot, the material for the top has density 2 lb per square foot, and the material for the side has density 1 lb per square foot. What should the dimension of the box be so that its weight is minimum? Ans: 2 by 2 by 5

15. Find all functions whose derivative is equal to \sqrt{x} .

16. Find the function whose instantaneous rate of change at each t is $e^{0.2t}$ and whose value at $t = 0$ is 8.

17. Find the function whose slope at each x is $8x^3 - \frac{1}{x}$ and whose graph passes through $(1, 4)$.

18. The marginal profit function of a company producing and selling x pairs of wool socks per week is $MP(x) = -0.1x + 150$. If the profit from selling 1000 pairs of socks is \$61,000, what is the profit function? What is the profit from selling 1500 pairs of socks? Ans: $P(x) = -0.05x^2 + 150x - 39,000$; $P(1500) = 73,500$

19. The rate of production of a certain item, in millions of units per month, is given by $P'(t) = 8te^{-t^2}$. Find the production function $P(t)$ if $P(0) = 5$. Ans: $P(t) = -4e^{-t^2} + 9$

20. Find the indefinite integral using substitution. Check your answer by differentiating.

i) $\int x^2 e^{x^3} dx$

iv) $\int (x^3 + x - 1)^{99} (3x^2 + 1) dx$

ii) $\int \frac{4x^3 - 2x}{x^4 - x^2 - 9} dx$

v) $\int \frac{e^x}{(10 + e^x)^4} dx$

iii) $\int \frac{\ln(x^4 + x^2 + 1)}{x^4 + x^2 + 1} (4x^3 + 2x) dx$

vi) $\int \frac{2x^3 + x}{(x^4 + x^2 + 1)^{3/2}} dx$

21. A Mustang GT is traveling along a straight road at 150 feet per second when the driver steps on the break. At that point the car starts decelerating at a constant rate of 30 feet per second squared until it stops. How long does it take to stop? What is the concavity of the position function? Ans: 5 sec, concave down.

22. What information about a function $f(x)$ does the sign of the derivative $f'(x)$ provide?

23. What information about a function $f(x)$ does the sign of the second derivative $f''(x)$ provide?

24. Is it possible to cover the **whole** xy -plane with graphs of antiderivatives of the function $f(x) = x$? Explain!

25. What is Calculus good for?